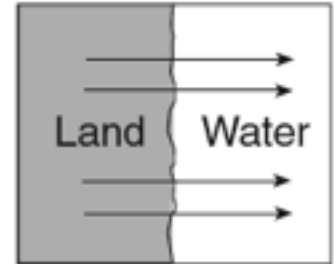
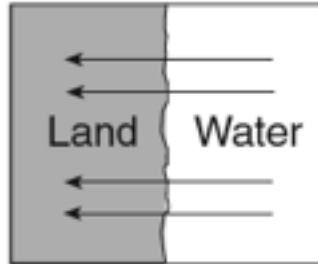
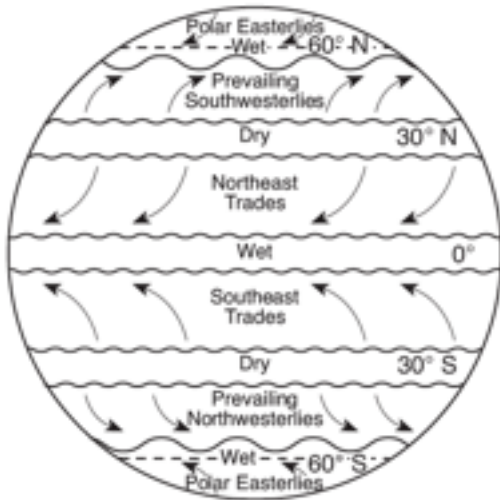


Winds



1. Winds in the northern hemisphere travel in what direction? _____
2. Winds in the southern hemisphere travel in what direction? _____
3. Winds that converge at the surface do what? _____
4. Winds that diverge at the surface do what? _____
5. Which diagram shows a land breeze? _____
6. What time of day does a land breeze occur? _____
7. Which diagram shows a sea breeze? _____
8. What time of day does a sea breeze occur? _____
9. Winds are caused by differences in what? _____
10. What are lines of equal pressure called? _____
11. How do you determine where the strongest winds are on a weather map?
